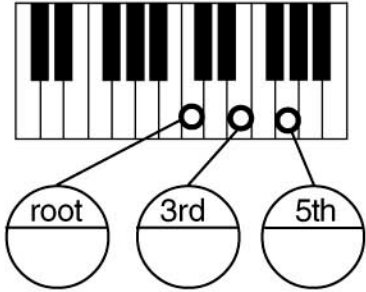


# Identifying Major and minor Triads 1

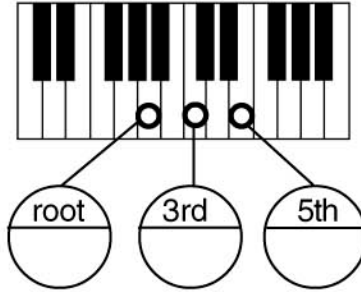
Score

Write the names of the notes in the circles and then provide the name of the chord in the space above the keyboard.

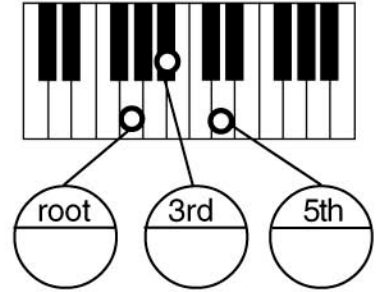
1 : Chord of \_\_\_\_\_



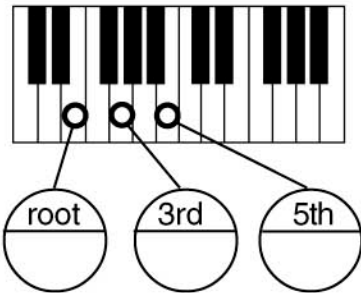
2 : Chord of \_\_\_\_\_



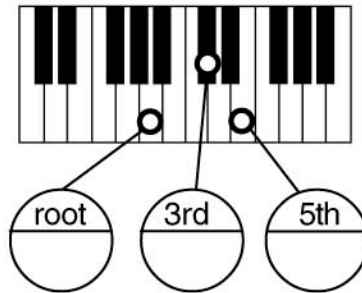
3 : Chord of \_\_\_\_\_



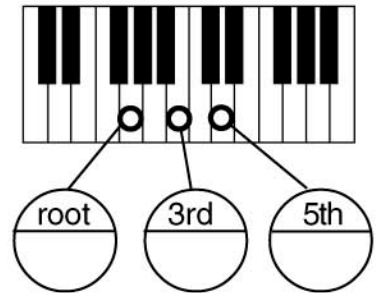
4 : Chord of \_\_\_\_\_



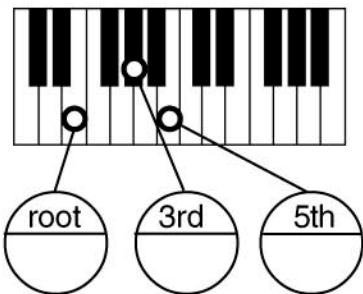
5 : Chord of \_\_\_\_\_



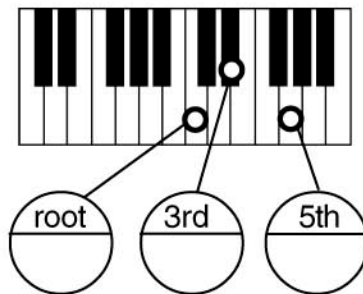
6 : Chord of \_\_\_\_\_



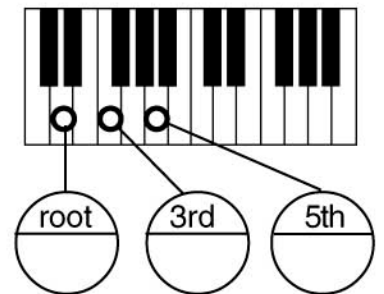
7 : Chord of \_\_\_\_\_



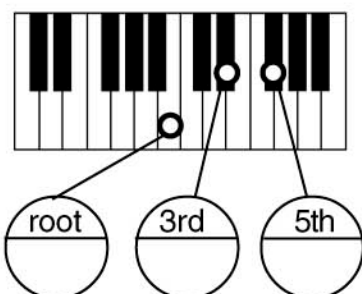
8 : Chord of \_\_\_\_\_



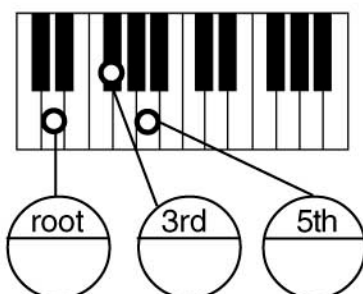
9 : Chord of \_\_\_\_\_



10 : Chord of \_\_\_\_\_



11 : Chord of \_\_\_\_\_



12 : Chord of \_\_\_\_\_

